

Recognizing Forces

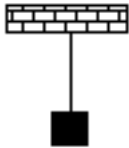
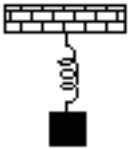
Read from **Lesson 2** of the **Newton's Laws** chapter at **The Physics Classroom**:

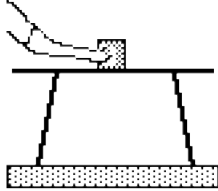
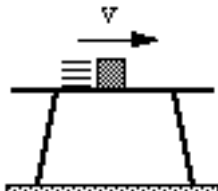

<http://www.physicsclassroom.com/Class/newtlaws/u2l2a.html>
<http://www.physicsclassroom.com/Class/newtlaws/u2l2b.html>

MOP Connection: Newton's Laws: sublevel 4




There are several situations described below. For each situation, fill in the list provided by indicating which forces are present and stating which features of the situation you used to determine the presence or absence of the force. To facilitate this exercise, utilize the Net Force Help Sheet. Upon completion of this assignment, check your answers using the available Web page.

<http://www.physicsclassroom.com/morehelp/recforce/recforce.html>

Description of Situation	Force Present (P) or Absent (A)?	Explanation
<div style="text-align: center;">  </div> <p>1. A block hangs <u>at rest</u> from the ceiling by a piece of rope. Consider the forces acting on the block.</p>	<p>Gravity P or A?</p> <p>Spring: P or A?</p> <p>Tension P or A?</p> <p>Normal: P or A?</p> <p>Friction P or A?</p> <p>Air Res.: P or A?</p>	<p>_____</p> <p>_____</p> <p>_____</p> <p>_____</p> <p>_____</p> <p>_____</p> <p>_____</p> <p>_____</p>
<div style="text-align: center;">  </div> <p>2. A block hangs from the ceiling by a spring. Consider the forces acting on the block when it is at rest (at its equilibrium position).</p>	<p>Gravity P or A?</p> <p>Spring: P or A?</p> <p>Tension P or A?</p> <p>Normal: P or A?</p> <p>Friction P or A?</p> <p>Air Res.: P or A?</p>	<p>_____</p> <p>_____</p> <p>_____</p> <p>_____</p> <p>_____</p> <p>_____</p> <p>_____</p> <p>_____</p>

Description of Situation	Force Present (P) or Absent (A)?		Explanation
 <p>6. A block is being pushed across the top of a table. Consider only the forces acting upon the block.</p>	Gravity	P or A?	<hr/> <hr/> <hr/> <hr/> <hr/> <hr/> <hr/> <hr/> <hr/> <hr/> <hr/> <hr/>
 <p>7. A block slides across the top of a table. Consider only the forces acting upon the block.</p>	Gravity	P or A?	<hr/> <hr/> <hr/> <hr/> <hr/> <hr/> <hr/> <hr/> <hr/> <hr/> <hr/> <hr/>
 <p>8. The driver of a car has her foot on the gas pedal. The wheels are turning as the car accelerates down the road. Consider only the forces acting upon the car.</p>	Gravity	P or A?	<hr/> <hr/> <hr/> <hr/> <hr/> <hr/> <hr/> <hr/> <hr/> <hr/> <hr/> <hr/>

Newton's Laws

Description of Situation	Force Present (P) or Absent (A)?		Explanation
 <p>9. A person is sitting on a sled and gliding across loosely packed snow along a horizontal surface. Consider only the forces acting on the person.</p>	Gravity	P or A?	<hr/> <hr/> <hr/> <hr/> <hr/> <hr/> <hr/> <hr/> <hr/> <hr/>
 <p>10. The wheels of a car are locked as it skids to a stop while moving across a level highway. Consider only the forces acting on the car.</p>	Gravity	P or A?	<hr/> <hr/> <hr/> <hr/> <hr/> <hr/> <hr/> <hr/> <hr/> <hr/>
 <p>11. A bucket of water, attached by a rope, is being pulled out of a well. Consider only the forces acting on the bucket.</p>	Gravity	P or A?	<hr/> <hr/> <hr/> <hr/> <hr/> <hr/> <hr/> <hr/> <hr/> <hr/>